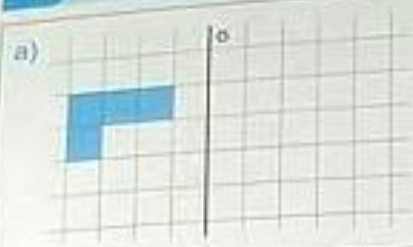




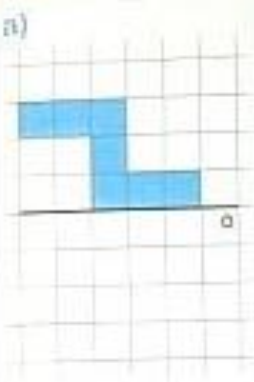
**1** Dokreslete obrazec osově souměrný podle osy  $o$ .


a) 

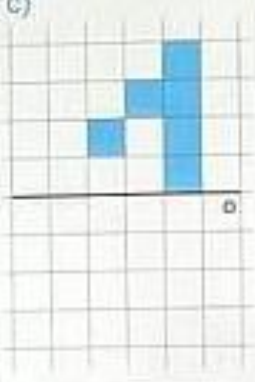
b) 


c) 


**2** Dokreslete obrazec osově souměrný podle osy  $o$ .

a) 

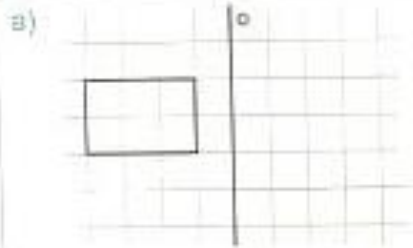
b) 

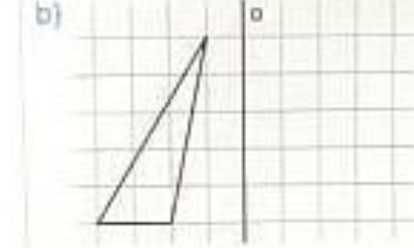
c) 

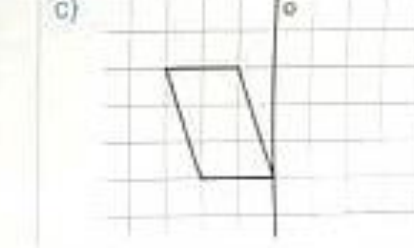
d) 

e) 

**3** Pomocí sítě sestrojte útvary osově souměrné podle osy  $o$ .

a) 

b) 

c) 

**4** Nakreslete útvar, který má daný počet os souměrnosti. Osy souměrnosti zakreslete.

<p>a) dvě osy souměrnosti</p>	<p>b) čtyři osy souměrnosti</p>	<p>c) jednu osu souměrnosti</p>
-------------------------------	---------------------------------	---------------------------------